

SYMBIOSIS INSTITUTE OF DESIGN

Constituent of Symbiosis International University
(Established under section 3 of the UGC Act 1956 vide notification No. F.9.12/2001-U.3 of the Govt. of India)
Accredited by NAAC with 'A' grade

SET [Design] – Sample Questions

Name :	SET ID						
--------	--------	--	--	--	--	--	--

Please read the following instructions carefully.

1. Do not open the seal until the Invigilator instructs you to open.
2. The test booklet contains the Answer OMR Sheet. Make sure that the Answer OMR sheet is not damaged in any way.
3. Use only a blue/black ballpoint pen to darken circles in the Answer OMR Sheet.
4. Write your SET-Id and darken appropriate circles in the Answer OMR Sheet.
5. The SET General Test Structure:

Section	No. of Questions	Total Marks
General English	30	30
Design Aptitude	70	70
Total	100	100

6. In the Answer OMR Sheet, darken the circles against the question numbers indicating your answers. For example, if your answer is B for a question, then darken as follows:

a b c d
○ ● ○ ○

Darken only one circle. If you darken more than one circle against any question, you will score zero mark.

7. Do not attempt to copy or allow others to copy. Any malpractice will invalidate your candidature.
8. Return the Answer OMR Sheet to the Invigilator before you leave the hall.
9. Do not leave the hall at any point of time without handing over your Answer OMR Sheet to the Invigilator.
10. Once you go out of the hall, re-entry is not permitted.
11. You may retain this Test Booklet with you.

Best Wishes!

General English

Direction for Questions 1-2: For each word written in capital letters, choose the word from the given alternatives which is the closest in meaning.

1. IMPERMEABLE
 - a. Temporary
 - b. Opinionated
 - c. Not permitting passage
 - d. Dependable

2. DISPENSE
 - a. Refuse or deny
 - b. Disregard
 - c. Deal out or distribute
 - d. Plan

Direction for question 3: choose the appropriate preposition to fill in the blanks.

3. The public are cautioned ____ pickpockets.
 - a. from
 - b. of
 - c. with
 - d. on

Direction for Questions 4-5: Use the appropriate verb in the following sentences choosing the correct verb from the given alternatives.

4. None of the students of this class _____ guilty.
 - a. is
 - b. are
 - c. have
 - d. have been

5. None but fools _____ it.
 - a. is believing
 - b. has believed
 - c. believes
 - d. believe

Design Aptitude

6. What is the following sign known as?



- a. Day and Night
- b. Yin and Yang
- c. Zen Philosophy
- d. World in Piece

7. What is the tagline of the company with this symbol?



- a. Just do it
- b. Think Different
- c. I'm lovin' it
- d. The ultimate driving machine

8. What are generally considered warm colors?

- a. Pinks, Purples, Reds
- b. Reds, Oranges, Yellows
- c. Oranges, Yellows, Greens
- d. Blues, Yellows, Pinks

9. The color blue green and turquoise is

- a. Hideous color scheme
- b. Religious colors
- c. Hot and spicy
- d. A cool color combination


10. Lucknowi embroidery is also called

- a. Meenakari
- b. Dastkari
- c. Kashidakari
- d. Chikankari

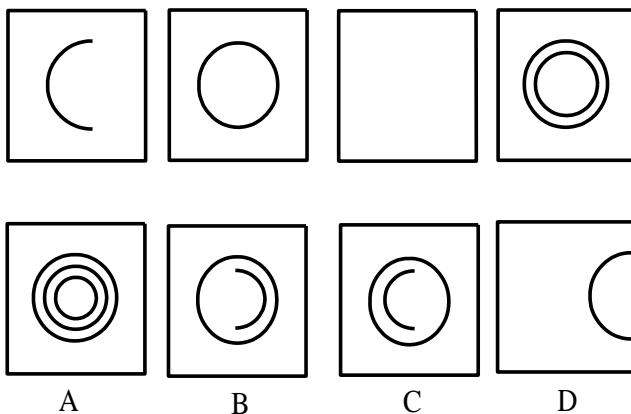
11. Remove the odd one out

- a. Triangle
- b. Square
- c. Rectangle
- d. Cube


12. From the following shapes choose the one that appears to be the most Asymmetrical in your opinion .



13. Find out the missing figure.



14. Which figure within the following group is an odd one out?



15. The Maharaja is the Mascot for which of the following airlines:
- Air India
 - Indian Airlines
 - Jet Airways
 - Sahara
16. Which of the following is not a famous craft of West Bengal.
- Kantha Embroidery
 - Warli Painting
 - Leather Batik
 - Sujani
17. In a Building Plan floor spaces are mentioned in what units
- Meter
 - Kilometer
 - Liters
 - Square feet
18. The most preferred material to make weapons and arms is
- Gun metal
 - Steel
 - Brass
 - Stone
19. Which of the following light source is more energy efficient?
- Candle
 - Tube light
 - LED light
 - Gas Lighter
20. The unit to measure liquids is
- Gum
 - Liter
 - Gravity
 - Grams